

Şekil Sayı Eşleştirme

×

= 8

○

= 2

☆

= 9

△

= 5

□

= 0

→

= 6

◇

= 4

▽

= 7

⬠

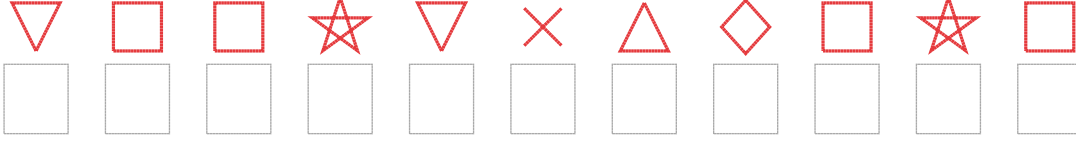
= 3

+

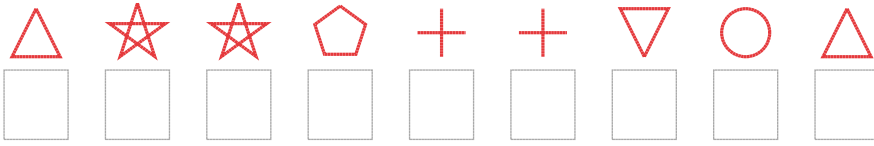
= 1

Aşağıdaki uzun şifreleri hatasız çözerek altlarına yazın:

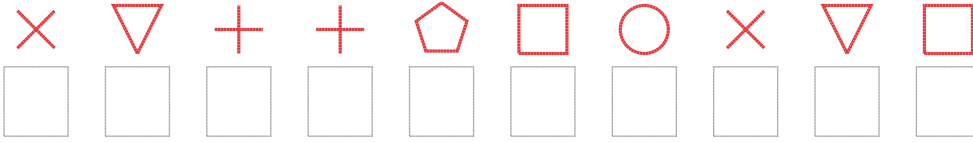
1. Şifre



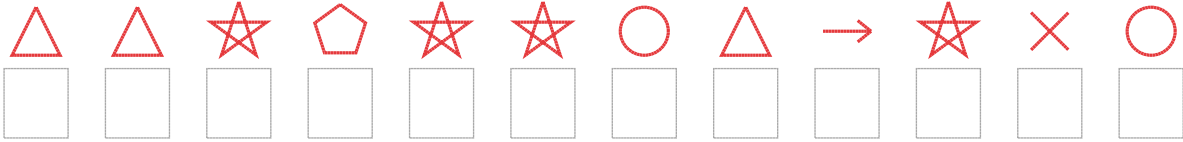
2. Şifre



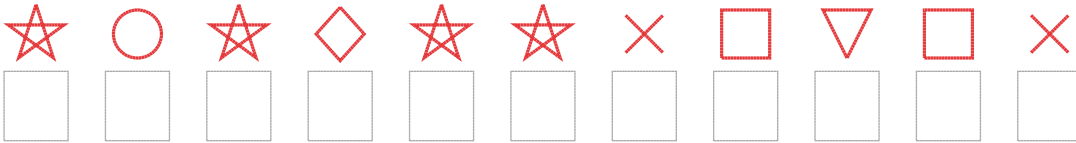
3. Şifre



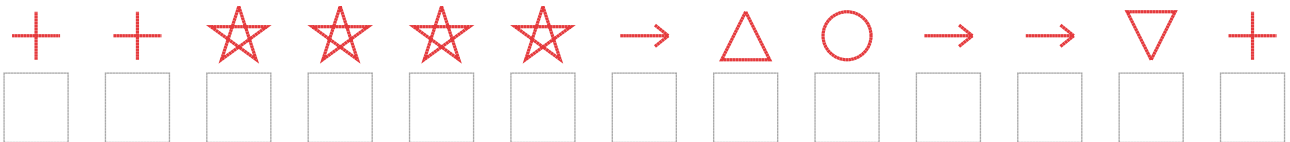
4. Şifre



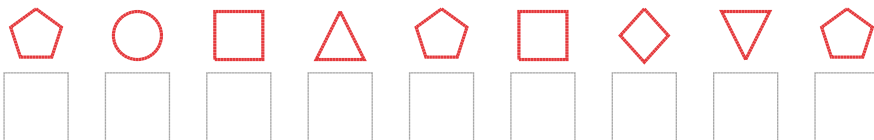
5. Şifre



6. Şifre



7. Şifre



□ BONUS: 7. ve 2. şifrenin ikinci rakamının toplamı kaçtır?

Cevap Anahtarı

1. Şifre: 70097854090
2. Şifre: 599311725
3. Şifre: 8711302870
4. Şifre: 559399256982
5. Şifre: 92949980708
6. Şifre: 1199996526671
7. Şifre: 320530473

□ Bonus Soru Cevabı: 11